

Name: \_\_\_\_\_

Date: \_\_\_\_\_

CHAPTER  
**1**

# Numbers to 10,000

## Lesson 1.1 Counting

**Write in standard form.**

1. five thousand, five \_\_\_\_\_
2. three thousand, twenty-nine \_\_\_\_\_
3. seven thousand, four hundred \_\_\_\_\_
4. nine thousand, nine hundred, nineteen \_\_\_\_\_
5. eight thousand, eighty-eight \_\_\_\_\_

**Write the numbers in word form.**

6. 6,900

\_\_\_\_\_

7. 3,077

\_\_\_\_\_

8. 4,621

\_\_\_\_\_

9. 2,198

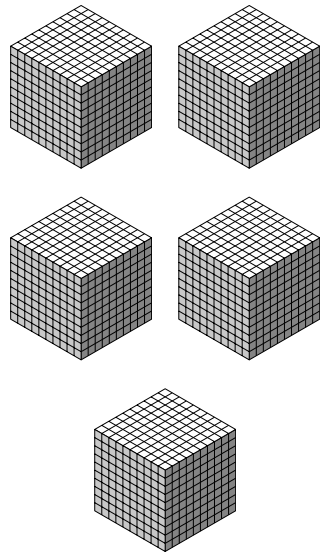
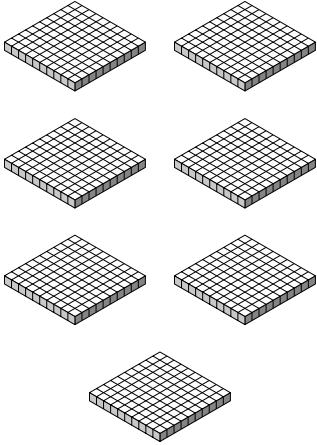
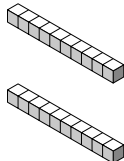

\_\_\_\_\_

Name: \_\_\_\_\_

Date: \_\_\_\_\_

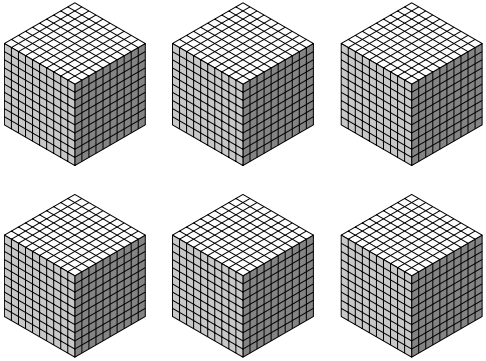
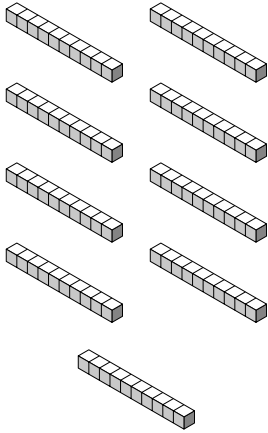

**Fill in the blanks.**

*Example*

Thousands	Hundreds	Tens	Ones
			

5 thousands, 7 hundreds 2 tens 9 ones = 5,729

**10.**

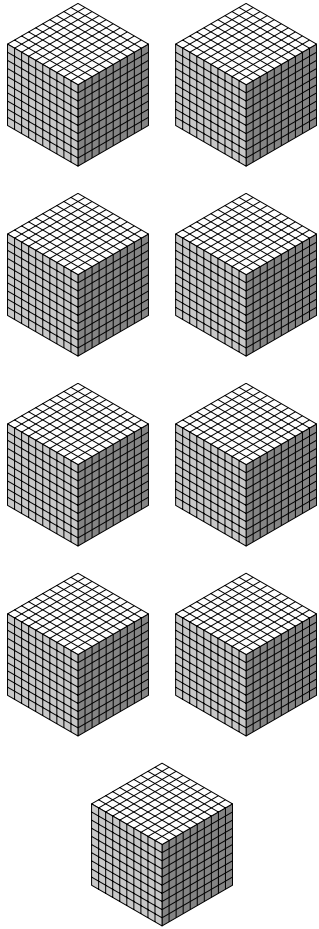
Thousands	Hundreds	Tens	Ones
			

\_\_\_\_\_ thousands, \_\_\_\_\_ hundreds \_\_\_\_\_ tens \_\_\_\_\_ ones = \_\_\_\_\_

Name: \_\_\_\_\_

Date: \_\_\_\_\_

11.

Thousands	Hundreds	Tens	Ones
			

\_\_\_\_\_ thousands, \_\_\_\_\_ hundreds \_\_\_\_\_ tens \_\_\_\_\_ ones = \_\_\_\_\_

Name: \_\_\_\_\_

Date: \_\_\_\_\_

**Complete each number pattern.**

**12.** 3,665 3,765 3,865 \_\_\_\_\_

**13.** 7,523 7,623 7,723 \_\_\_\_\_

**14.** 1,798 2,798 \_\_\_\_\_

**15.** 4,321 5,321 \_\_\_\_\_

**16.** 3,894 3,884 \_\_\_\_\_

**17.** 5,762 5,752 \_\_\_\_\_

**18.** 8,205 7,205 \_\_\_\_\_

**19.** 6,127 5,127 \_\_\_\_\_

**Fill in the missing numbers.**

**20.** 10 more than 8,905 is \_\_\_\_\_.

**21.** 100 more than 9,327 is \_\_\_\_\_.

**22.** 1,000 more than 7,365 is \_\_\_\_\_.

**23.** 10 less than 6,738 is \_\_\_\_\_.

**24.** 100 less than 5,861 is \_\_\_\_\_.

**25.** 1,000 less than 8,495 is \_\_\_\_\_.