

Name : _____

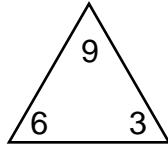
Score : _____

Teacher : _____

Date : _____

Complete Each Family of Facts

1)



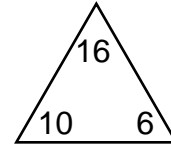
$$\square + \square = \square$$

$$\square + \square = \square$$

$$\square - \square = \square$$

$$\square - \square = \square$$

4)



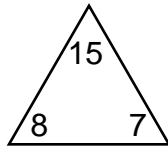
$$\square + \square = \square$$

$$\square + \square = \square$$

$$\square - \square = \square$$

$$\square - \square = \square$$

2)



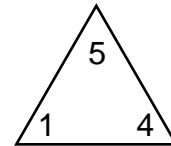
$$\square + \square = \square$$

$$\square + \square = \square$$

$$\square - \square = \square$$

$$\square - \square = \square$$

5)



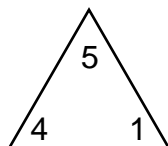
$$\square + \square = \square$$

$$\square + \square = \square$$

$$\square - \square = \square$$

$$\square - \square = \square$$

3)



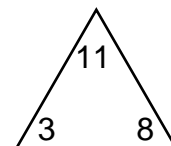
$$\square + \square = \square$$

$$\square + \square = \square$$

$$\square - \square = \square$$

$$\square - \square = \square$$

6)



$$\square + \square = \square$$

$$\square + \square = \square$$

$$\square - \square = \square$$

$$\square - \square = \square$$

Name : _____

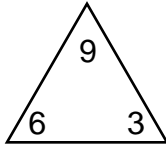
Score : _____

Teacher : _____

Date : _____

Complete Each Family of Facts

1)



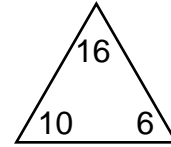
$$\boxed{6} + \boxed{3} = \boxed{9}$$

$$\boxed{3} + \boxed{6} = \boxed{9}$$

$$\boxed{9} - \boxed{3} = \boxed{6}$$

$$\boxed{9} - \boxed{6} = \boxed{3}$$

4)



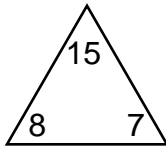
$$\boxed{10} + \boxed{6} = \boxed{16}$$

$$\boxed{6} + \boxed{10} = \boxed{16}$$

$$\boxed{16} - \boxed{6} = \boxed{10}$$

$$\boxed{16} - \boxed{10} = \boxed{6}$$

2)



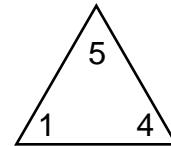
$$\boxed{8} + \boxed{7} = \boxed{15}$$

$$\boxed{7} + \boxed{8} = \boxed{15}$$

$$\boxed{15} - \boxed{7} = \boxed{8}$$

$$\boxed{15} - \boxed{8} = \boxed{7}$$

5)



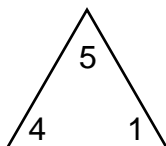
$$\boxed{1} + \boxed{4} = \boxed{5}$$

$$\boxed{4} + \boxed{1} = \boxed{5}$$

$$\boxed{5} - \boxed{4} = \boxed{1}$$

$$\boxed{5} - \boxed{1} = \boxed{4}$$

3)



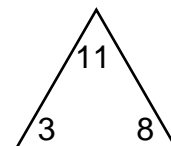
$$\boxed{4} + \boxed{1} = \boxed{5}$$

$$\boxed{1} + \boxed{4} = \boxed{5}$$

$$\boxed{5} - \boxed{1} = \boxed{4}$$

$$\boxed{5} - \boxed{4} = \boxed{1}$$

6)



$$\boxed{3} + \boxed{8} = \boxed{11}$$

$$\boxed{8} + \boxed{3} = \boxed{11}$$

$$\boxed{11} - \boxed{8} = \boxed{3}$$

$$\boxed{11} - \boxed{3} = \boxed{8}$$